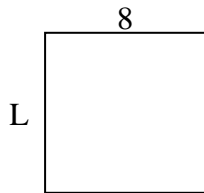


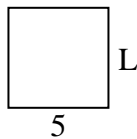


Determine the value of 'L'.

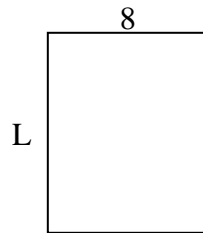
1) Area = $64 u^2$



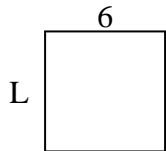
2) Area = $25 u^2$



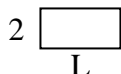
3) Area = $80 u^2$



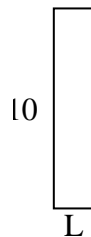
4) Area = $36 u^2$



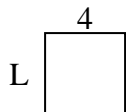
5) Area = $8 u^2$



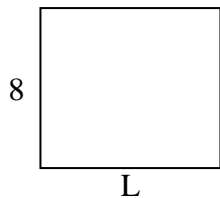
6) Area = $20 u^2$




7) Area = $16 u^2$



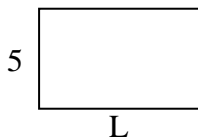
8) Area = $72 u^2$



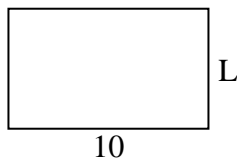
9) Area = $36 u^2$



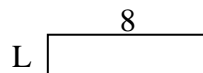
10) Area = $40 u^2$




11) Area = $60 u^2$



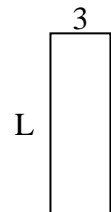
12) Area = $16 u^2$



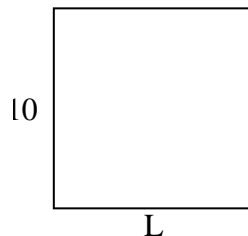
13) Area = $40 u^2$



14) Area = $27 u^2$



15) Area = $100 u^2$



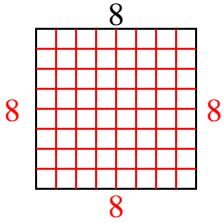
Answers

1. _____
2. _____
3. _____
4. _____
5. _____
6. _____
7. _____
8. _____
9. _____
10. _____
11. _____
12. _____
13. _____
14. _____
15. _____

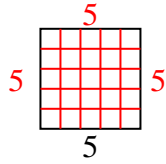


Determine the value of 'L'.

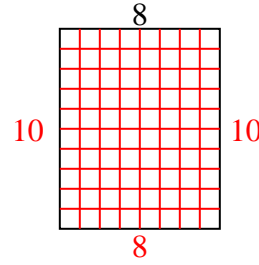
1) Area = $64 u^2$



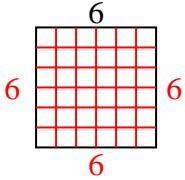
2) Area = $25 u^2$



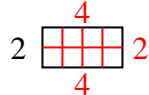
3) Area = $80 u^2$



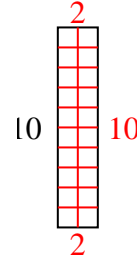
4) Area = $36 u^2$



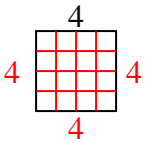
5) Area = $8 u^2$



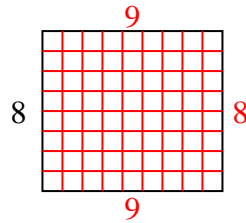
6) Area = $20 u^2$



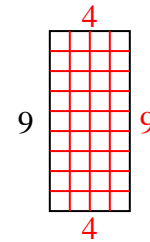
7) Area = $16 u^2$



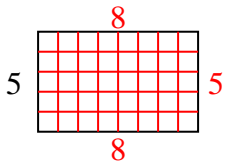
8) Area = $72 u^2$



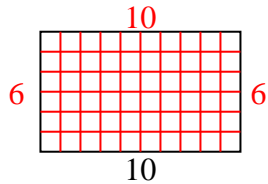
9) Area = $36 u^2$



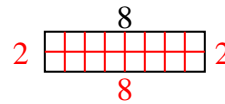
10) Area = $40 u^2$



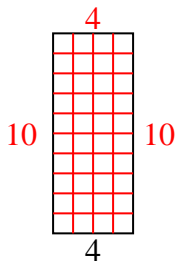
11) Area = $60 u^2$



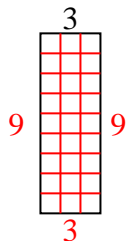
12) Area = $16 u^2$



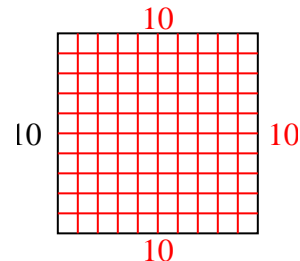
13) Area = $40 u^2$



14) Area = $27 u^2$



15) Area = $100 u^2$



Answers

1. 8
2. 5
3. 10
4. 6
5. 4
6. 2
7. 4
8. 9
9. 4
10. 8
11. 6
12. 2
13. 10
14. 9
15. 10